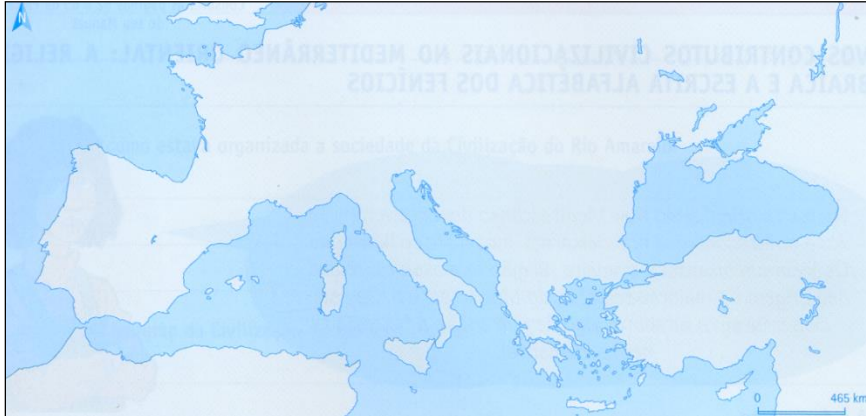


The European Identity through Art

Questionnaire – Classic Art

1. Paint, in the map, the territory of the Ancient Greece.



Europe Map (detail)

2. Say the period of splendor of the Classic Art, in Ancient Greece.

3. Refer four characteristics of the Classic Art.

4. Identify the three architectonic orders of the Classical Art, represented in the picture below.



5. Label the pictures a) to f).



a) _____




b) _____




c) _____



d) _____



e) _____



f) _____

6. Rome conquered Greece, but the Greek culture conquered the Romans. Nevertheless, there were specific characteristics of the Roman Empire Art. Identify three original artistic elements or characteristics of the Roman Empire.

7. Identify three examples of the Classic Art in Portugal.

Good work!